






# Sjov Addition

Find det manglende tal for at fuldføre  
additionen!






1.  +  \_\_\_\_\_  2

2.     +  \_\_\_\_\_  9

3.    +  \_\_\_\_\_  6

4.  +  \_\_\_\_\_  6

5.   +  \_\_\_\_\_  4

6.    +  \_\_\_\_\_  4