






Sjov Addition

Find det manglende tal for at fuldføre
additionen!

1.  +  _____ =  2

2.     +  _____ =  6

3.    +  _____ =  8

4.     +  _____ =  5

5.  +  _____ =  4

6.     +  _____ =  9