




Sjov Addition




Find det manglende tal for at fuldføre additionen!

1.  +  _____ =  7

2.  +  _____ =  6

3.  +  _____ =  4

4.  +  _____ =  6

5.  +  _____ =  9

6.  +  _____ =  5