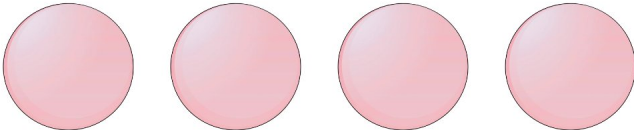




Sjov Addition

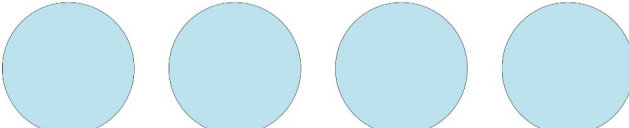


Find det manglende tal for at fuldføre
additionen!



1.  +  ___ =  8

2.  +  ___ =  6

3.  +  ___ =  4

4.  +  ___ =  7

5.  +  ___ =  9

6.  +  ___ =  10