






Sjov Addition

Find det manglende tal for at fuldføre additionen!

1.  +  _____ =  2

2.   +  _____ =  6

3.   +  _____ =  3

4.    +  _____ =  6

5.      +  _____ =  6

6.     +  _____ =  7