


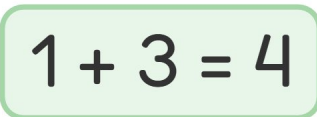




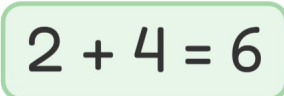


# Sjov Addition

Find det manglende tal for at fuldføre  
additionen!

1.  <sup>1</sup> +  3 =  4   $1 + 3 = 4$

2.  <sup>1</sup>  <sup>2</sup> +  4 =  6   $2 + 4 = 6$

3.  <sup>1</sup>  <sup>2</sup>  <sup>3</sup>  <sup>4</sup> +  5 =  9   $4 + 5 = 9$

4.  <sup>1</sup> +  2 =  3   $1 + 2 = 3$

5.  <sup>1</sup>  <sup>2</sup>  <sup>3</sup>  <sup>4</sup> +  2 =  6   $4 + 2 = 6$

6.  <sup>1</sup>  <sup>2</sup> +  5 =  7   $2 + 5 = 7$