




# Sjov Addition

Find det manglende tal for at fuldføre  
additionen!

1.  +  \_\_\_ =  6

2.  +  \_\_\_ =  6

3.  +  \_\_\_ =  4

4.  +  \_\_\_ =  6

5.  +  \_\_\_ =  7

6.  +  \_\_\_ =  8