




# Sjov Addition

Find det manglende tal for at fuldføre additionen!

1.  +  \_\_\_\_\_  3

2.  +  \_\_\_\_\_  3

3.  +  \_\_\_\_\_  6

4.  +  \_\_\_\_\_  8

5.  +  \_\_\_\_\_  7

6.  +  \_\_\_\_\_  6