


Find brøken

Navn: _____ Dato: _____

★ Indkreds figuren, der viser brøken.


1

$$\frac{2}{4}$$




2

$$\frac{1}{2}$$



3

$$\frac{2}{3}$$



4

$$\frac{1}{3}$$

