

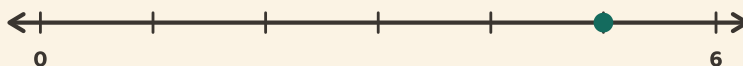
Brøker på linjen

Navn: _____ Dato: _____

★ Prikken markerer en brøk. Indkreds hvilken.

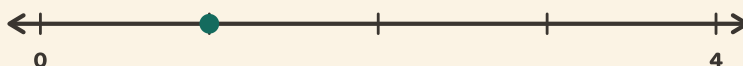
1

0 → 1 in 6 steps




2

0 → 1 in 4 steps



3

0 → 1 in 3 steps



4

0 → 1 in 6 steps

