



Hvem har færrest?



Navn: _____ Dato: _____

★ Se på begge grupper. Indkreds den gruppe, der har FÆRREST.

1



2



3

