

# Fra plus til gange

Navn: \_\_\_\_\_ Dato: \_\_\_\_\_


★ Tæl de lige store grupper. Færdiggør multiplikationen.

1




$$2 \times 2 = \square$$

2




$$3 \times 3 = \square$$

3



$$4 \times 2 = \square$$

4



$$2 \times 2 = \square$$