


# Hvor mange grupper?

Navn: \_\_\_\_\_ Dato: \_\_\_\_\_


★ Ringene laver lige store grupper. Skriv hvor mange grupper der er.

1




$$12 \div 4 = \square$$

2




$$4 \div 2 = \square$$

3



$$8 \div 4 = \square$$

4



$$12 \div 4 = \square$$