


Hvor mange grupper?

Navn: _____ Dato: _____

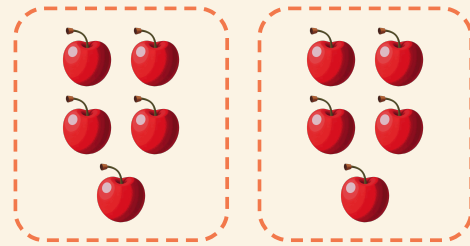
★ Ringene laver lige store grupper. Skriv hvor mange grupper der er.

1




$$20 \div 5 = \square$$

2




$$10 \div 5 = \square$$

3



$$12 \div 3 = \square$$

4



$$4 \div 2 = \square$$