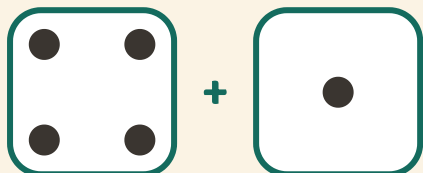


Slå og læg sammen

Navn: _____ Dato: _____

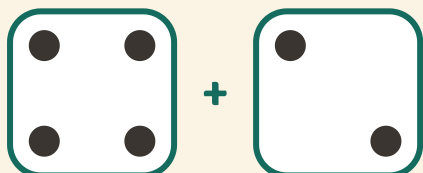
★ Tæl prikkerne på begge terninger. Skriv summen.

1




$4 + 1 = \square$

2



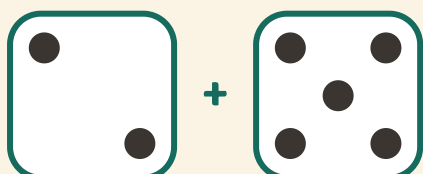
$4 + 2 = \square$

3



$3 + 2 = \square$

4



$2 + 5 = \square$