



Del det op

Navn: _____ Dato: _____


★ Del bunken ligeligt i kasserne. Skriv hvor mange hver får.

1




$$15 \div 3 = \square$$

2



$$9 \div 3 = \square$$

3



$$20 \div 4 = \square$$

4



$$16 \div 4 = \square$$