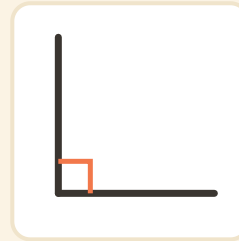
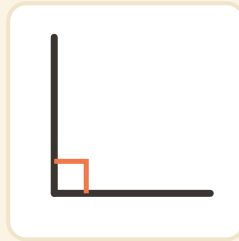
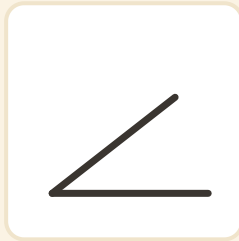
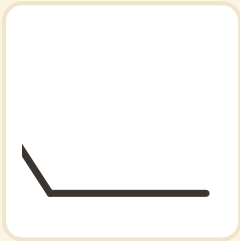


Ret vinkel-jagt

Navn: _____ Dato: _____

★ Indkreds hver RET vinkel (dem med det lille kvadrat).

1



2

