






































Hemmeligt Ord Addition

Løs hver opgave for at afsløre et bogstav.
Hvad er det hemmelige ord?



 +  +  +  = <input type="text"/> → <input type="text"/>	 +  +  +  = <input type="text"/> → <input type="text"/>
 +  +  +  = <input type="text"/> → <input type="text"/>	 +  +  +  = <input type="text"/> → <input type="text"/>
 +  +  +  = <input type="text"/> → <input type="text"/>	 +  +  +  = <input type="text"/> → <input type="text"/>
 +  +  +  = <input type="text"/> → <input type="text"/>	 +  +  +  = <input type="text"/> → <input type="text"/>
 +  +  +  = <input type="text"/> → <input type="text"/>	

O=35 D=36 V=13 R=25 A=12 G=37 I=26 J=27 T=29 P=38