






Sjov Subtraktion

Find det manglende tal for at fuldføre subtraktionen!

1.  -  ___  1

2.  -  ___  2

3.  -  ___  3

4.  -  ___  2

5.  -  ___  3

6.  -  ___  2