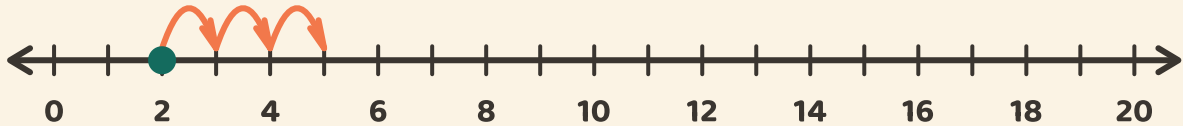


# Hop langs linjen!

Navn: \_\_\_\_\_ Dato: \_\_\_\_\_

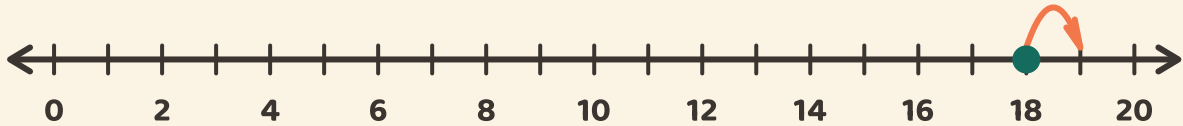
★ Start ved prikken. Tæl hoppene. Skriv additionssvaret.

1



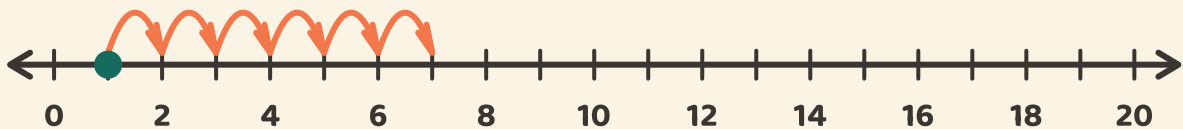
$$2 + 3 = \boxed{\phantom{00}}$$

2



$$18 + 1 = \boxed{\phantom{00}}$$

3



$$1 + 6 = \boxed{\phantom{00}}$$