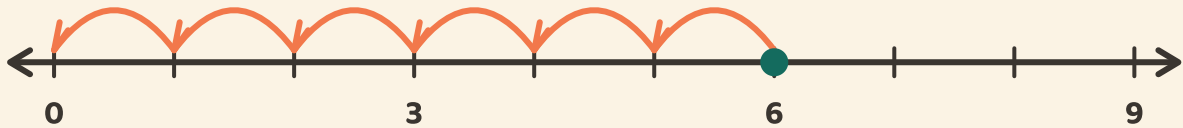


Hop ned til nul

Navn: _____ Dato: _____

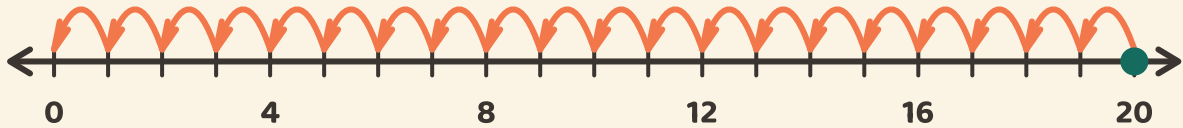
★ Tæl de lige store hop tilbage til nul. Skriv hvor mange hop det tager.

1



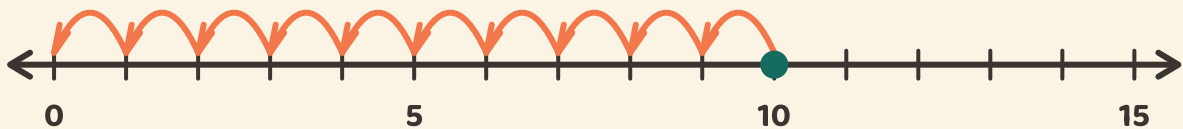
$$6 \div 3 = \square$$

2



$$20 \div 4 = \square$$

3



$$10 \div 5 = \square$$