


Hvor mange tiere?

Navn: _____ Dato: _____


★ Tæl tierstængerne. Færdiggør regnestykket.

1



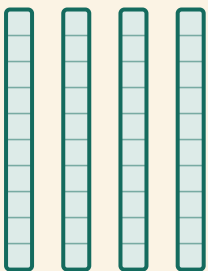
$$\square \times 10 = \square$$

2




$$\square \times 10 = \square$$

3



$$\square \times 10 = \square$$

4



$$\square \times 10 = \square$$