


Lav en tier!

Navn: _____ Dato: _____


★ Indkreds 10 enere for at bundte en tier. Skriv hvor mange tiere og enere.

1




$$\square \times 10 + \square$$

2




$$\square \times 10 + \square$$

3



$$\square \times 10 + \square$$

4



$$\square \times 10 + \square$$