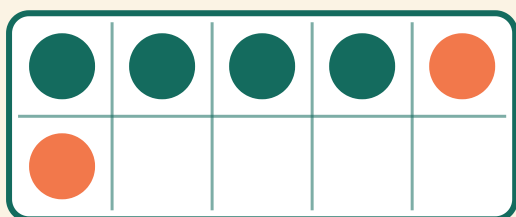


# Tierrammeaddition

Navn: \_\_\_\_\_ Dato: \_\_\_\_\_


★ Tæl de to farver. Skriv svaret på additionsstykket.

1



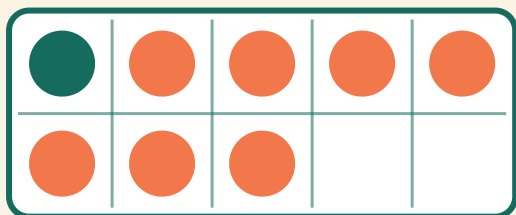
$$4 + 2 = \square$$

2



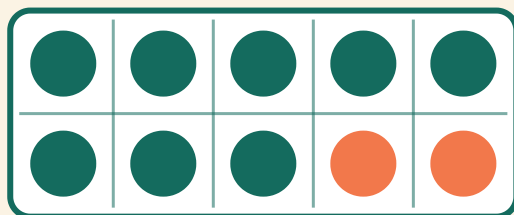
$$8 + 1 = \square$$

3



$$1 + 7 = \square$$

4



$$8 + 2 = \square$$