






























Bilddiagramm lesen

Name: _____ Datum: _____

★ Zähle die Bilder in jeder Reihe. Schreibe die Zahlen auf.

| | |
|---|--|
|  |        |
|  |         |
|  |      |
|  |  |

| | | |
|---|---|----------------------|
|  | = | <input type="text"/> |
|  | = | <input type="text"/> |
|  | = | <input type="text"/> |
|  | = | <input type="text"/> |