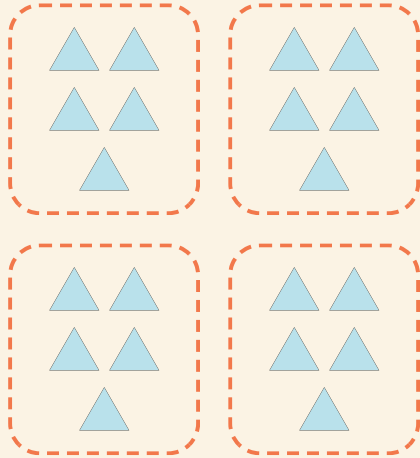


Leichte Gruppen

Name: _____ Datum: _____

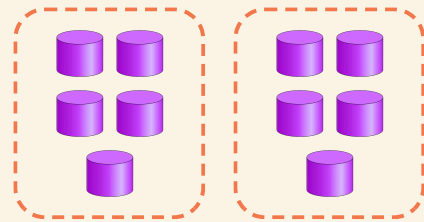
★ Zähle die gleich großen Gruppen. Vervollständige die Malaufgabe.

1



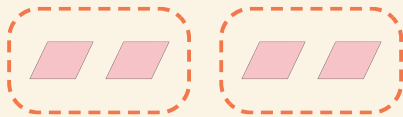
$$4 \times 5 = \square$$

2



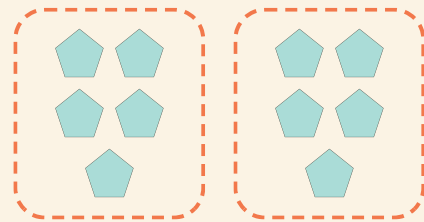
$$2 \times 5 = \square$$

3



$$2 \times 2 = \square$$

4



$$2 \times 5 = \square$$