



Gerecht teilen

Name: _____ Datum: _____



Verteile den Haufen gerecht auf die Kisten. Schreibe auf, wie viele jede bekommt.

1




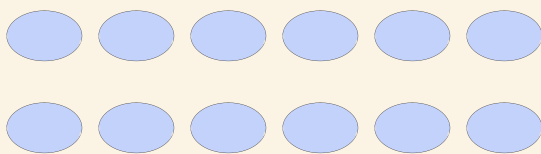
$$10 \div 2 = \square$$

2



$$20 \div 4 = \square$$

3



$$12 \div 3 = \square$$

4



$$4 \div 2 = \square$$