


Vom Plus zum Mal

Name: _____ Datum: _____


★ Zähle die gleichen Gruppen. Vervollständige die Malaufgabe.

1




$$3 \times 4 = \square$$

2




$$4 \times 3 = \square$$

3



$$3 \times 2 = \square$$

4



$$3 \times 2 = \square$$