


# Reihen und Spalten

Name: \_\_\_\_\_ Datum: \_\_\_\_\_


★ Zähle die Reihen und Spalten. Vervollständige die Malaufgabe.

1



$$4 \times 3 = \square$$

2




$$4 \times 6 = \square$$

3



$$3 \times 3 = \square$$

4



$$2 \times 5 = \square$$