


Wie viele Gruppen?

Name: _____ Datum: _____

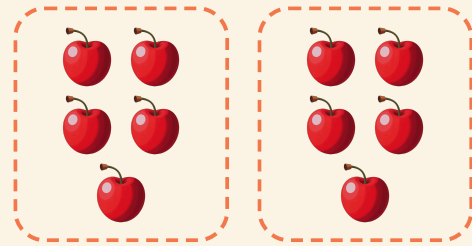
★ Die Ringe bilden gleich große Gruppen. Schreibe auf, wie viele Gruppen es sind.

1




$$20 \div 5 = \square$$

2




$$10 \div 5 = \square$$

3



$$12 \div 3 = \square$$

4



$$4 \div 2 = \square$$