

Domino-Mathe

Name: _____ Datum: _____


★ Zähle beide Seiten des Dominosteins. Schreibe die Summe auf.

1



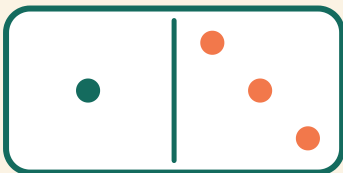
$$6 + 6 = \square$$

2




$$4 + 3 = \square$$

3



$$1 + 3 = \square$$

4



$$2 + 6 = \square$$