


Kästchen zählen

Name: _____ Datum: _____


★ Zähle die Kästchen im Rechteck. Vervollständige die Malaufgabe.

1




$3 \times 5 = \square$

2




$4 \times 4 = \square$

3



$4 \times 5 = \square$

4



$3 \times 9 = \square$