


Immer wieder plus

Name: _____ Datum: _____


★ In jedem Ring ist gleich viel. Vervollständige die Plusaufgabe.

1



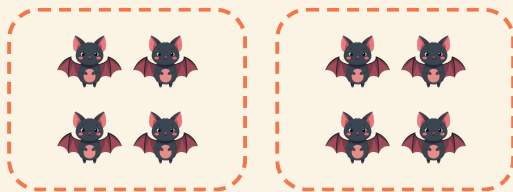
$$4 + 4 = \square$$

2




$$2 + 2 + 2 + 2 = \square$$

3



$$4 + 4 = \square$$

4



$$3 + 3 = \square$$