


# Wie viele Gruppen?

Name: \_\_\_\_\_ Datum: \_\_\_\_\_


★ Die Ringe bilden gleich große Gruppen. Schreibe auf, wie viele Gruppen es sind.

1




$$12 \div 4 = \square$$

2




$$4 \div 2 = \square$$

3



$$8 \div 4 = \square$$

4



$$12 \div 4 = \square$$