


Wie viele Zehner?

Name: _____ Datum: _____


★ Zähle die Zehnerstangen. Vervollständige die Rechenaufgabe.

1



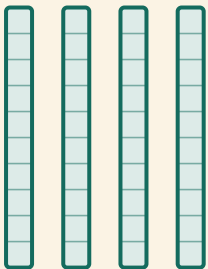
$$\square \times 10 = \square$$

2




$$\square \times 10 = \square$$

3



$$\square \times 10 = \square$$

4



$$\square \times 10 = \square$$