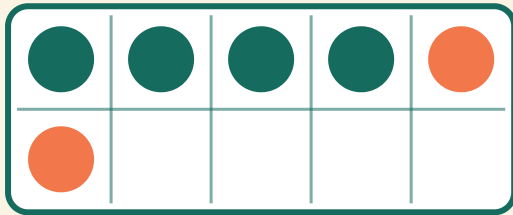


Plus im Zehnerfeld

Name: _____ Datum: _____

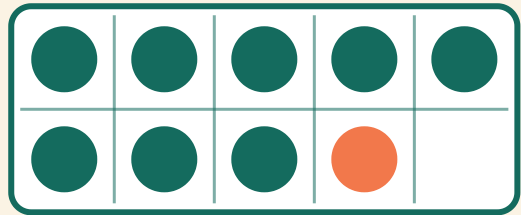
★ Zähle die beiden Farben. Schreibe das Ergebnis der Plusaufgabe auf.

1



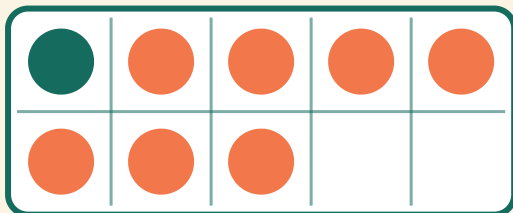
$$4 + 2 = \square$$

2



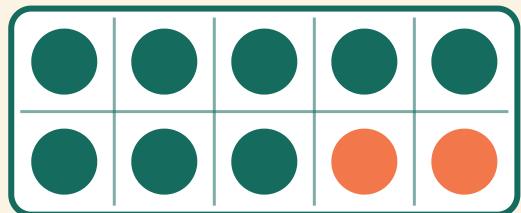
$$8 + 1 = \square$$

3



$$1 + 7 = \square$$

4



$$8 + 2 = \square$$