




Addition Fun


Find the missing number to make the addition correct!

1.  + 4 = 9 5 + 4 = 9

2.  + 4 = 8 4 + 4 = 8

3.  + 4 = 5 1 + 4 = 5

4.  + 5 = 8 3 + 5 = 8

5.  + 3 = 5 2 + 3 = 5

6.  + 3 = 5 2 + 3 = 5