



# Addition Fun



Add the numbers and write your answers!

1.   $+$    $1 + 5 = 6$

2.   $+$    $1 + 3 = 4$

3.   $+$    $2 + 3 = 5$

4.   $+$    $2 + 5 = 7$

5.   $+$    $2 + 1 = 3$

6.   $+$    $3 + 1 = 4$