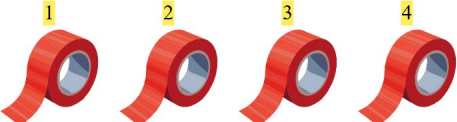


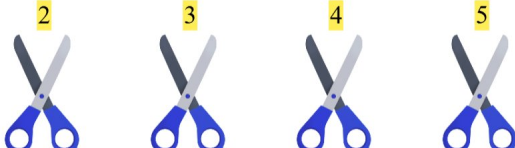
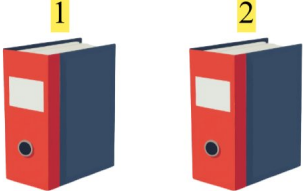



# Addition Fun

Add the numbers and write your answers!

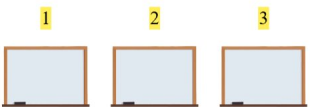
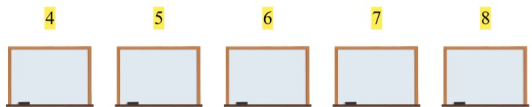
1.  +   $4 + 3 = 7$

2.  +   $1 + 4 = 5$

3.  +   $2 + 1 = 3$

4.  +   $1 + 1 = 2$

5.  +   $1 + 1 = 2$

6.  +   $3 + 5 = 8$