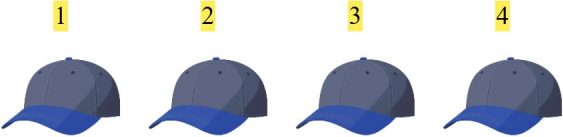




# Addition Fun

Add the numbers and write your answers!

1.     $4 + 1 = 5$

2.     $3 + 4 = 7$

3.     $1 + 5 = 6$

4.     $3 + 1 = 4$

5.     $1 + 5 = 6$

6.     $1 + 1 = 2$