





Addition Fun



Add the numbers and write your answers!

1.  +  = $3 + 2 = 5$

2.  +  = $3 + 5 = 8$

3.  +  = $5 + 3 = 8$

4.  +  = $2 + 3 = 5$

5.  +  = $4 + 1 = 5$

6.  +  = $4 + 1 = 5$