













Addition Fun



Add the numbers and write your answers!

1. ¹ + ² ³ $1 + 2 = 3$

2. ¹ ² ³ + ⁴ ⁵ $3 + 2 = 5$

3. ¹ ² ³ ⁴ + ⁵ $4 + 1 = 5$

4. ¹ ² + ³ ⁴ $2 + 2 = 4$

5. ¹ ² ³ ⁴ + ⁵ ⁶ $4 + 2 = 6$

6. ¹ ² ³ + ⁴ $3 + 1 = 4$