







# Addition Fun




Add the numbers and write your answers!

1.     $1 + 2 = 3$

2.     $5 + 3 = 8$

3.     $4 + 2 = 6$

4.     $2 + 4 = 6$

5.     $2 + 1 = 3$

6.     $3 + 3 = 6$