



Addition Fun

Count the images, add the number, and write


you answer!

1.  + 3 $4 + 3 = 7$

2.  + 1 $4 + 1 = 5$

3.  + 1 $2 + 1 = 3$

4.  + 1 $2 + 1 = 3$

5.  + 5 $3 + 5 = 8$

6.  + 2 $4 + 2 = 6$