



# Addition Fun


Count the images, add the number, and write your answer!


1.  + 1  $5 + 1 = 6$

2.  + 4  $5 + 4 = 9$

3.  + 4  $1 + 4 = 5$

4.  + 5  $2 + 5 = 7$

5.  + 2  $1 + 2 = 3$

6.  + 1  $2 + 1 = 3$