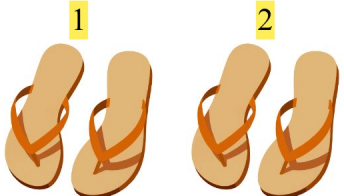

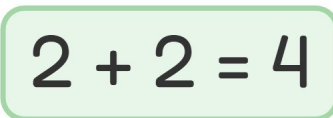


Addition Fun

Count the images, add the number, and write your answer!

1.   **2**  $2 + 2 = 4$

2.   **2**  $1 + 2 = 3$

3.   **1**  $4 + 1 = 5$

4.   **2**  $3 + 2 = 5$

5.   **4**  $3 + 4 = 7$

6.   **1**  $3 + 1 = 4$