



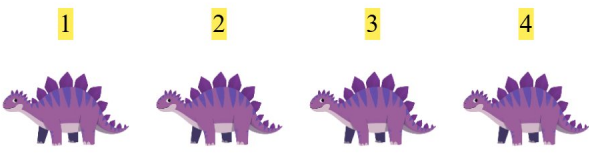
Addition Fun


Count the images, add the number, and write your answer!

1.  + 5 $4 + 5 = 9$

2.  + 3 $4 + 3 = 7$

3.  + 4 $4 + 4 = 8$

4.  + 3 $4 + 3 = 7$

5.  + 1 $3 + 1 = 4$

6.  + 2 $5 + 2 = 7$