



Addition Fun


Count the images, add the number, and write your answer!


1.  + 1 5 + 1 = 6

2.  + 4 2 + 4 = 6

3.  + 1 1 + 1 = 2

4.  + 4 3 + 4 = 7

5.  + 1 5 + 1 = 6

6.  + 1 5 + 1 = 6