


Addition Fun


Count the images, add the number, and write your answer!


1.  + 1 =

2.  + 4 =

3.  + 1 =

4.  + 4 =

5.  + 1 =

6.  + 1 =