



Addition Fun

Count the images, add the number, and write your answer!


1.  + 2 $2 + 2 = 4$

2.  + 3 $3 + 3 = 6$

3.  + 5 $2 + 5 = 7$

4.  + 2 $5 + 2 = 7$

5.  + 5 $3 + 5 = 8$

6.  + 1 $2 + 1 = 3$